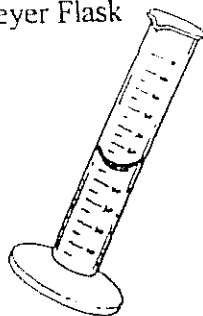


Science Basics

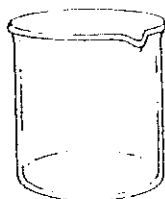
Name _____
Hour _____

List the names of these scientific objects on the lines below their picture:


Erlenmeyer Flask
Beaker



Graduated Cylinder
Triple Beam Balance



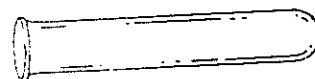
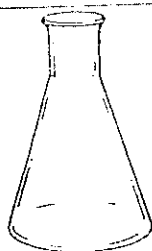
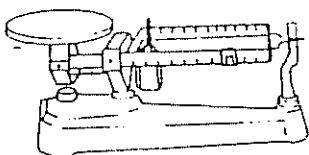
Test Tube
Metric Ruler



1 _____

2 _____

3 _____



4 _____

5 _____

6 _____

7. Which of the instruments above is the most accurate device to measure liquids? _____

8. What is the mass of 1,234ml of water? _____

9. What units does a triple beam balance use? _____

10. What units does a graduated cylinder use? _____

11. What units does a beaker use? _____

Use the following words to answer the questions below: *Mass, Volume, Temperature, Length*

12. A triple beam balance measures? _____

13. A graduated cylinder measures? _____

14. A thermometer measures? _____

15. A metric ruler measures? _____